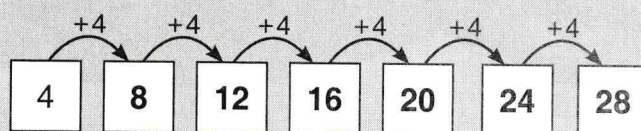




When we **skip-count**, we add the same number over and over again.

EXAMPLE Skip-count by 4's to 28.

We begin at 4, and then add 4 over and over to get to 28.



PRACTICE

1. Skip-count by 2's to 20.

2									
---	--	--	--	--	--	--	--	--	--

2. Skip-count by 5's to 50.

5									
---	--	--	--	--	--	--	--	--	--

3. Skip-count by 3's to 30.

3									
---	--	--	--	--	--	--	--	--	--

4. Skip-count by 10's to 100.

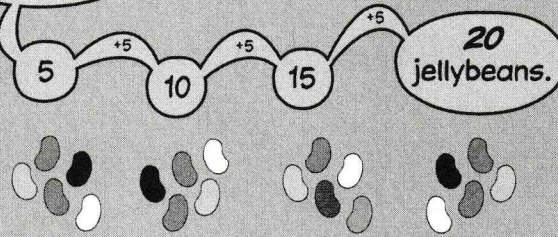
10									
----	--	--	--	--	--	--	--	--	--

5. Skip-count by 11's to 110.

11									
----	--	--	--	--	--	--	--	--	--

Skip-counting helps us count objects more quickly.

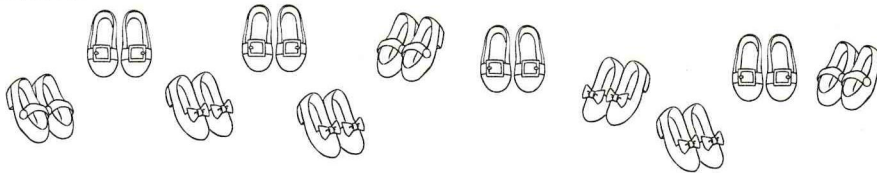
Instead of counting each of these jellybeans one by one, I can skip-count by 5's. There are:



PRACTICE

Count the number of each given object in the pictures below.

6. Shoes



6. _____

7. Wheels (Each tricycle has 3 wheels.)




7. _____

8. Pigeons




8. _____

9. Legs (Each slumberbee has 6 legs.)



9. _____

10. Legs (Each octapug has 8 legs.)



10. _____

PRACTICE

Count the number of each given object in the pictures below.


11. Flower petals (Each flower has 9 petals.)

11. _____



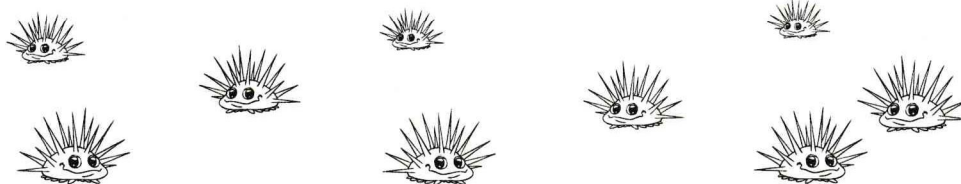
12. Total number of sides (Each shape below is a decagon.)

12. _____




13. Spikes (Each porcupod has 15 spikes.)

13. _____



14. Spots (Each spotted jackalope has 50 spots.)

14. _____



15. Each coin below is worth 25 cents. How many cents are the coins worth all together?




15. _____



Grogg made all of the following patterns using gumballs.

EXAMPLE

How many gumballs did Grogg use to make the pattern below?

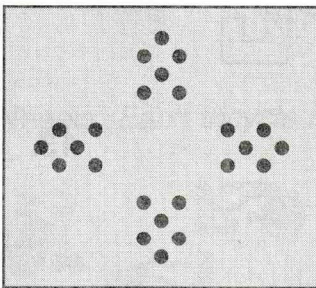


Grogg used **12** gumballs to make the pattern.

PRACTICE

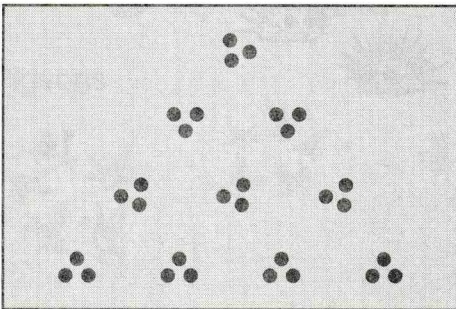
Find the number of gumballs that Grogg used to make each pattern.

16.




16. _____

17.



17. _____

18.




18. _____

PRACTICE


Find the number of gumballs that Grogg used to make each pattern.

19.




19. _____

20.




20. _____

21.




21. _____

22.



22. _____

23.




23. _____

PRACTICE


Find the number of gumballs that Grogg used to make each pattern.

24.



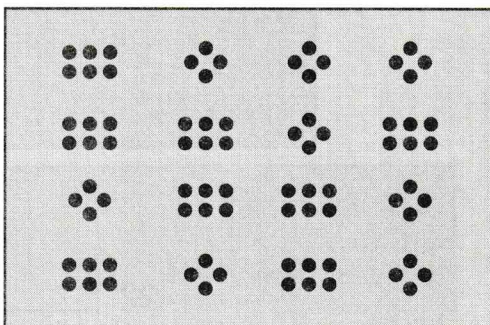
24. _____

25.




25. _____

26.




26. _____

27.



27. _____

28.



28. _____