


PRACTICE 5C

1.




$7 \times 3 = \square$

$3 \times 7 = \square$

$21 \div 3 = \square$

$21 \div 7 = \square$

2.



Mrs. Reed bought 18 pears.

She put 6 pears in each plastic bag.

How many bags of pears were there?

3.




Jake bought 5 bundles of books.

There were 4 books in each bundle.

How many books did he buy altogether?

4.



5 children share 35 cookies equally.

How many cookies does each child get?