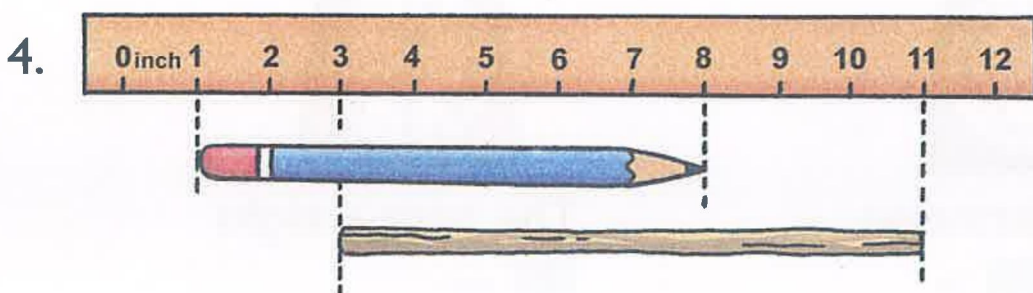


REVIEW J

1. The total length of 2 pieces of ribbon is 9 in.
One piece of ribbon is 5 in. long.
Find the length of the other piece of ribbon.
2. 1 lb of grapes costs \$3.
Mrs. King bought 7 lb of grapes.
How much did she pay?
3. Nicole used 24 yd of cloth to make dresses.
She used 4 yd of cloth for each dress.
How many dresses did she make?




- Which is shorter, the stick or the pencil?
How much shorter?
5. A store sold 302 qt of milk last month.
It sold 29 qt more milk this month.
How much milk did the store sell this month?
 6. A tank can hold 115 gal of water.
It contains 38 gal of water.
How many more gallons of water can be poured into this tank?
 7. John weighs 65 lb.
His sister weighs 19 lb less.
What is the weight of his sister?

8. Ryan had a rope 18 yd long.
He cut it into 3 equal pieces.
Find the length of each piece.

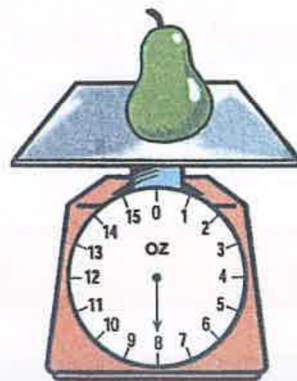
9. 1 ft = in.

10. There are cups in a quart.

11.



The watermelon
weighs lb.



The pear weighs
 oz.

12. Jason drinks 2 c of milk daily.

(a) How many cups of milk does he drink in 6 days?

(b) How many cups of milk does he drink in a week?

13. Eric paid \$45 for 5 lb of shrimps.

What was the cost of 1 lb of shrimps?

14. 1 yd of cloth costs \$3.

Kathy bought 9 yd of cloth.

How much did she pay for the cloth?

15. An apple and a peach weigh 15 oz.

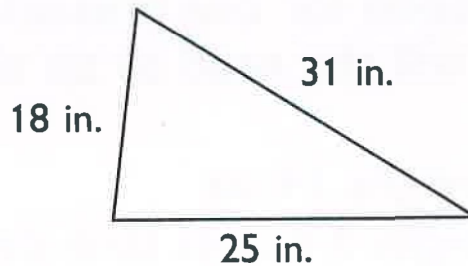
The apple weighs 8 oz.

What is the weight of the peach?

16. How many quarts of water can be poured into a 1-gal container?
17. Emily needs to tie 4 presents of the same size with ribbons.
She uses 2 yd of ribbon for one present.
How much ribbon will she need to tie all the presents?
18. A bag of carrots weighs 14 oz.
A bag of lettuce weighs 3 oz less than the bag of carrots.
(a) What is the weight of the bag of lettuce?
(b) What is the total weight of the two bags?
19. Sara cut 16 ft of string into 4 equal pieces.
What is the length of each piece of string?
20. One bag of sugar weighs 2 lb.
How much do 10 bags of sugar weigh?
21. Use your ruler to draw a line 9 in. long.
22. Emma weighs 59 lb.
Her mother is 78 lb heavier than she.
(a) Find the weight of Emma's mother.
(b) What is the total weight of Emma and her mother?
23. 28 qt of water is poured equally into 4 containers.
How much water is in each container?
24. A piece of ribbon is 1 m long.
A piece of string is 1 yd long.
Is the ribbon longer than the string?


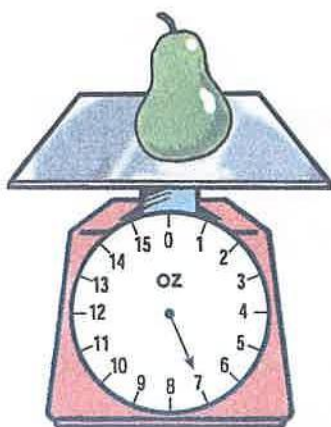
25. Scott uses 2 c of milk to make one pudding.
He wants to make 7 puddings.
How many cups of milk does he need?

26. What is the total length around the triangle?



27. Ryan walked 470 yd to a gift shop. He then walked another 250 yd to the post office.
How far did he walk?
28. David weighs 65 lb. John weighs 127 lb. Amy weighs 88 lb.
(a) What is the total weight of David, John and Amy?
(b) How much lighter is David than John?

29.



- (a) The pear weighs oz.
(b) The apple weighs oz.
(c) Which weighs more? How much more?