


## EXERCISE 59

1. Write **heavier than**, **lighter than** or **as heavy as**.

(a)



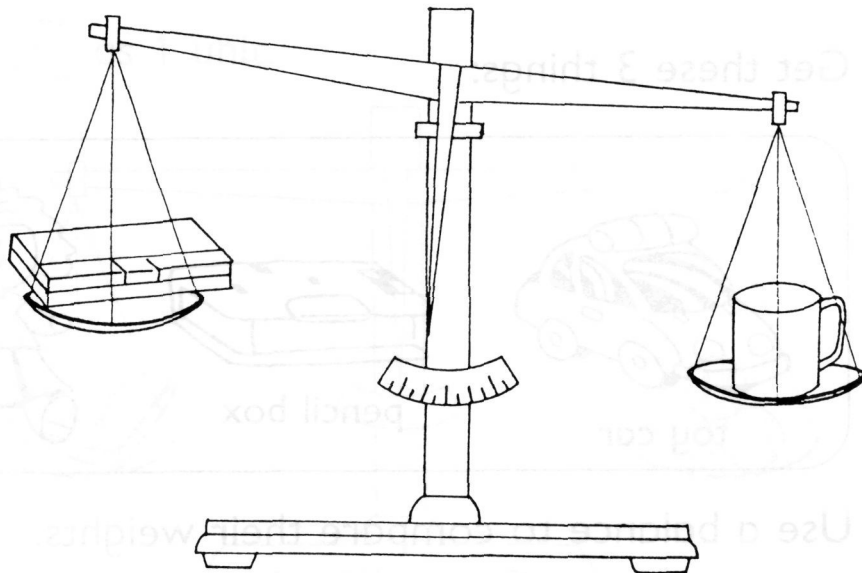
The papaya is \_\_\_\_\_ the pineapple.

(b)




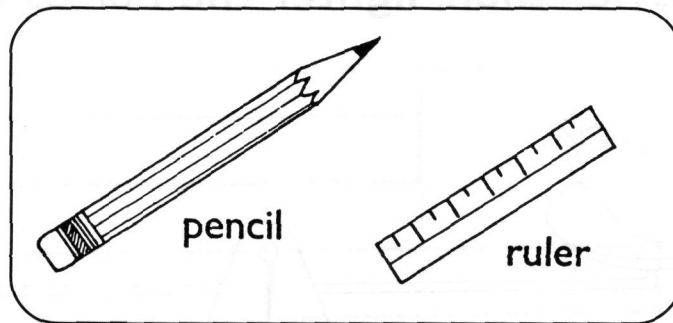
The crab is \_\_\_\_\_ the fish.

(c)



The pencil box is \_\_\_\_\_ the mug.


2. (a) Get these 2 things:



Use a balance to compare their weights.

The \_\_\_\_\_ is heavier than the \_\_\_\_\_.

(b) Get these 3 things:




Use a balance to compare their weights.

The \_\_\_\_\_ is the heaviest.

The \_\_\_\_\_ is the lightest.

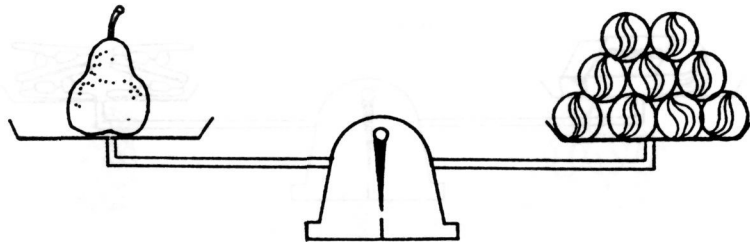
## EXERCISE 60

1. (a) Use  as 1 unit.



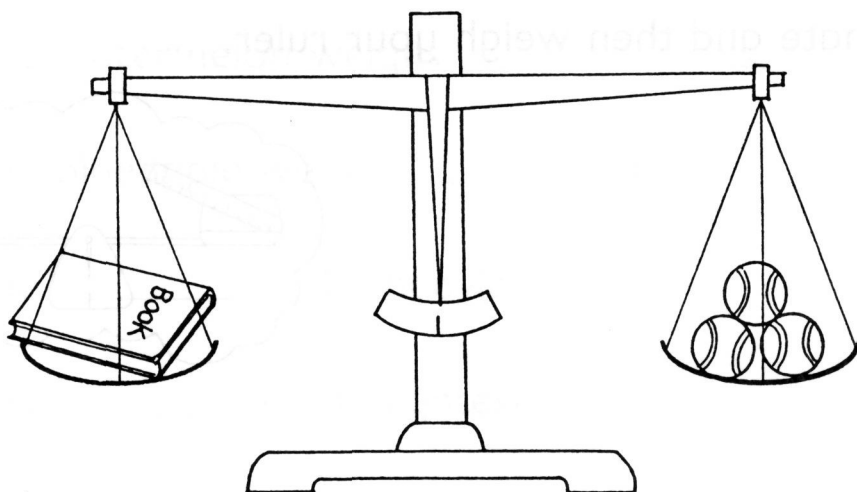
The key weighs \_\_\_\_\_ units.

(b) Use  as 1 unit.



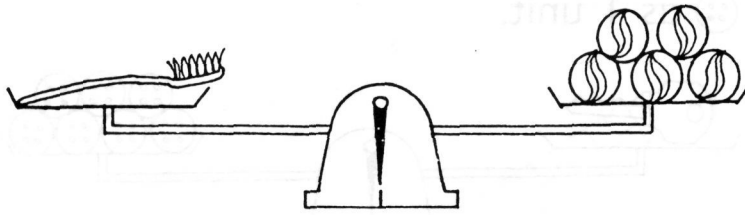
The pear weighs \_\_\_\_\_ units.

(c) Use  as 1 unit.



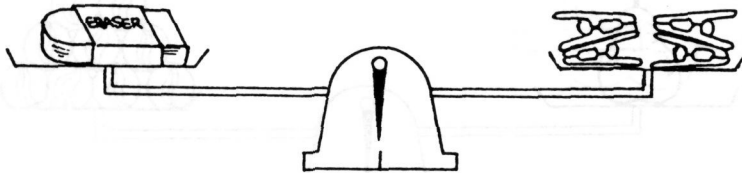
The book weighs \_\_\_\_\_ units.

2. (a) Use  as 1 unit.



The weight of the toothbrush is \_\_\_\_\_ units.

(b) Use  as 1 unit.



The weight of the eraser is \_\_\_\_\_ units.

3. Use  as 1 unit.



Estimate and then weigh your ruler.



My ruler weighs about \_\_\_\_\_ units.

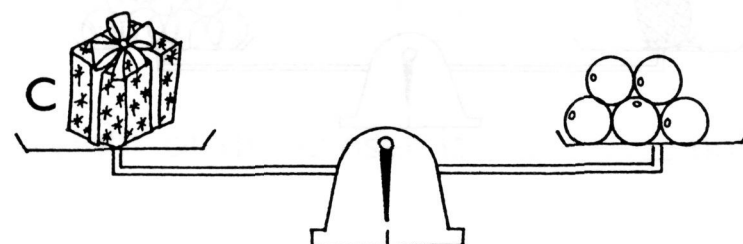
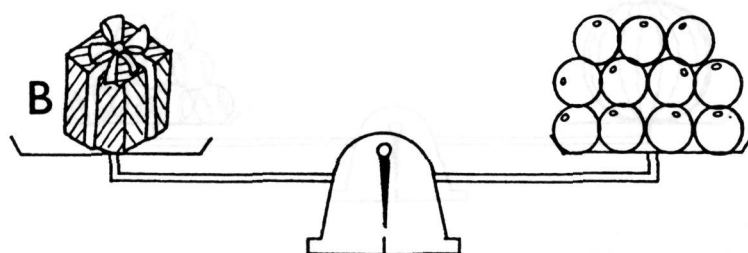

## EXERCISE 61

1. Use  as 1 unit.



- (a) The papaya weighs \_\_\_\_\_ units.
- (b) The watermelon weighs \_\_\_\_\_ units.
- (c) The pineapple weighs \_\_\_\_\_ units.
- (d) The \_\_\_\_\_ is the heaviest.
- (e) The \_\_\_\_\_ is the lightest.
- (f) The pineapple is lighter than the \_\_\_\_\_.

2. Use ○ as 1 unit.



- (a) Box A weighs \_\_\_\_\_ units.
- (b) Box B weighs \_\_\_\_\_ units.
- (c) Box C weighs \_\_\_\_\_ units.
- (d) Box A is heavier than Box \_\_\_\_\_ .
- (e) Box \_\_\_\_\_ is the lightest.
- (f) Box \_\_\_\_\_ is the heaviest.