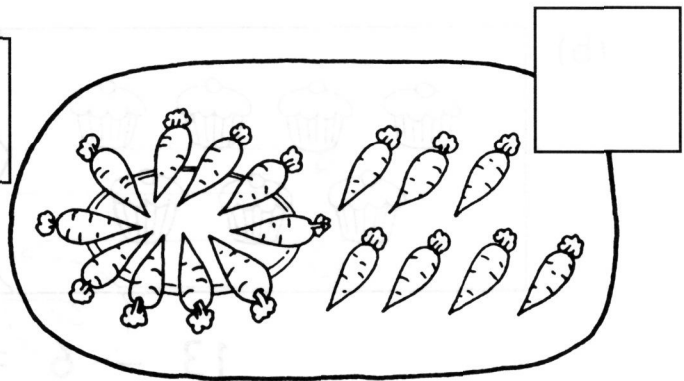
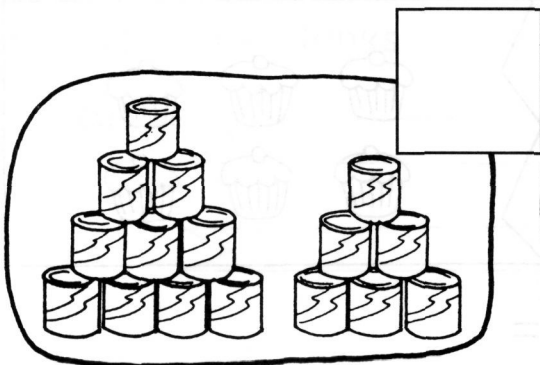
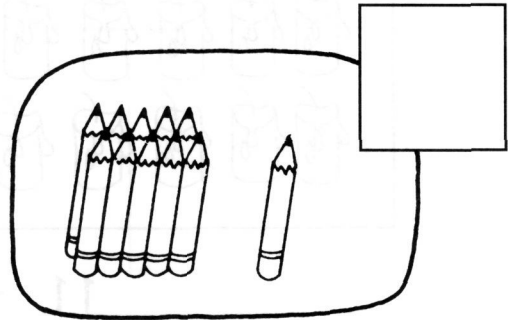
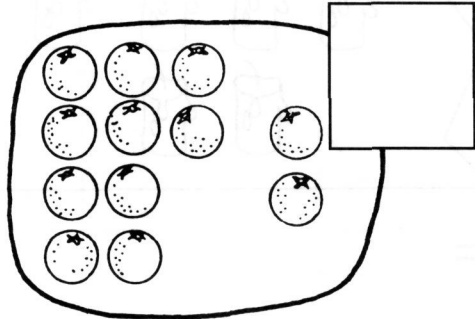


# REVIEW 6

1. Write the numbers.



2. Match the numbers and words.

thirteen

11

nineteen

eleven

19

twelve

twenty

13

fifteen

14

sixteen

15

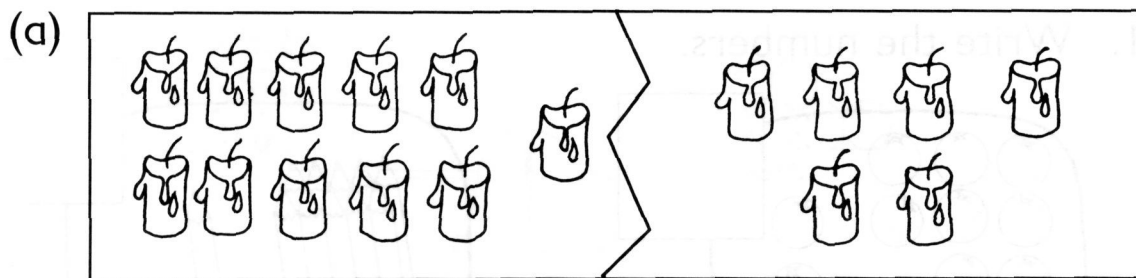
fourteen

20


16

12

3. Add or subtract.



$$11 + 6 =$$



$$13 - 6 =$$

4. Add or subtract.

Then pair up the number sentences.

$$14 - 6 =$$

$$1 + 4 =$$

$$12 - 3 =$$

$$2 + 5 =$$

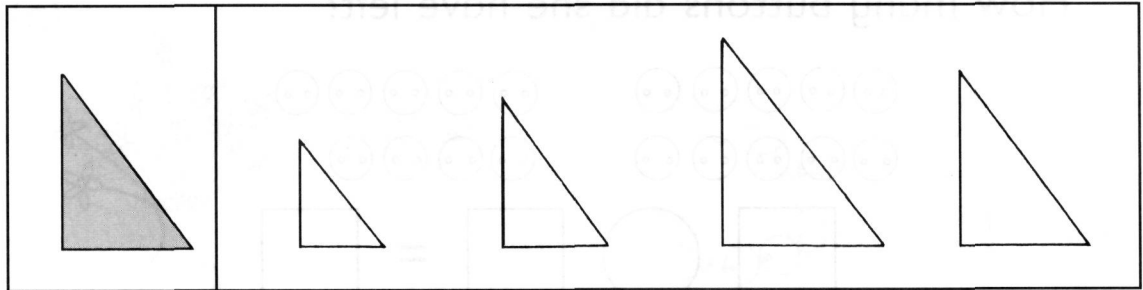
$$15 - 8 =$$

$$7 + 2 =$$

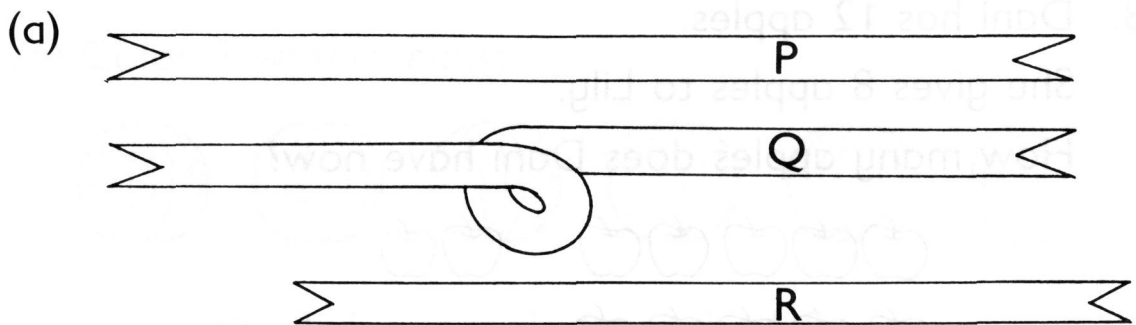
$$14 - 9 =$$

$$4 + 4 =$$

5. Color the triangle which has the same size as the shaded one.



6. Fill in the blanks.



\_\_\_\_\_ is the shortest ribbon.


\_\_\_\_\_ is the longest ribbon.

- (b)

\_\_\_\_\_ is the tallest child.

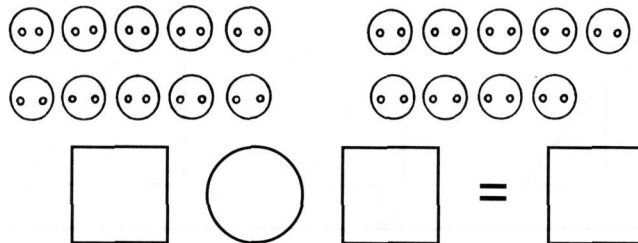
\_\_\_\_\_ is the shortest child.

\_\_\_\_\_ is taller than A.



7. Mary had 19 buttons.  
She used 5 of them for a dress.

How many buttons did she have left?




She had \_\_\_\_\_ buttons left.

---

8. Dani has 12 apples.  
She gives 8 apples to Lily.

How many apples does Dani have now?

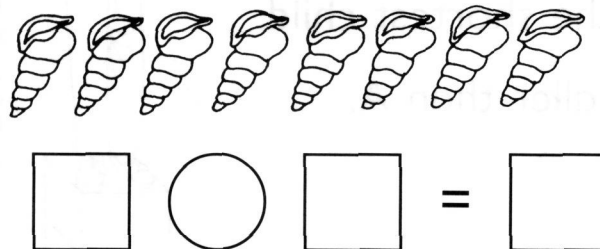


She has \_\_\_\_\_ apples now.

---

9. Jerome has 8 shells.  
John gives him 7 more.

How many shells does Jerome have now?



He has \_\_\_\_\_ shells now.