

## REVIEW 7

1. Count and write the numbers in words.

(a)

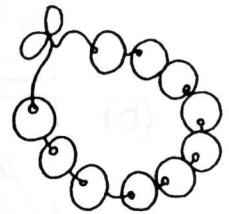
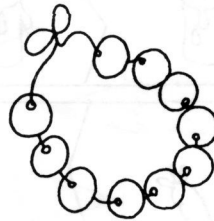


\_\_\_\_\_


(b)



\_\_\_\_\_



2. (a) Color 3 watermelons.



(b) Color the 3rd pineapple from the left.



3. Arrange the numbers in order. Begin with the smallest.

6

14

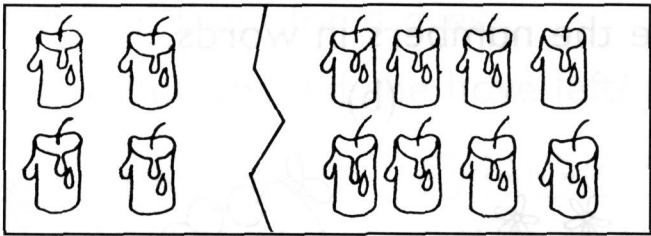
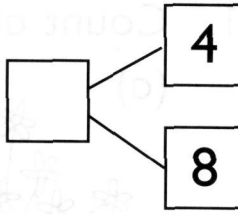
3

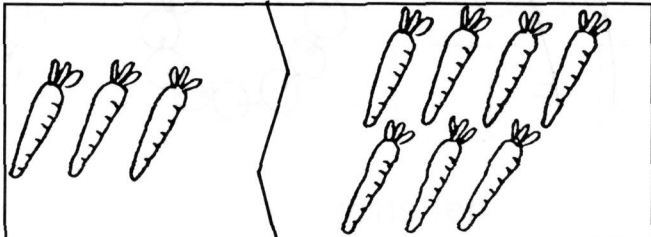
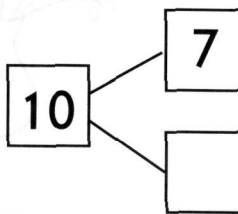
11

7


\_\_\_\_\_, \_\_\_\_\_, \_\_\_\_\_, \_\_\_\_\_, \_\_\_\_\_,  
smallest \_\_\_\_\_ greatest

4. Write the missing numbers.

(a)  

(b)  

5. Add or subtract.

(a) 

$$9 + 4 =$$

(b) 

$$12 - 7 =$$

6. Add or subtract.

(a)  $3 + 6 =$

(b)  $8 - 7 =$

(c)  $5 + 5 =$

(d)  $10 - 2 =$

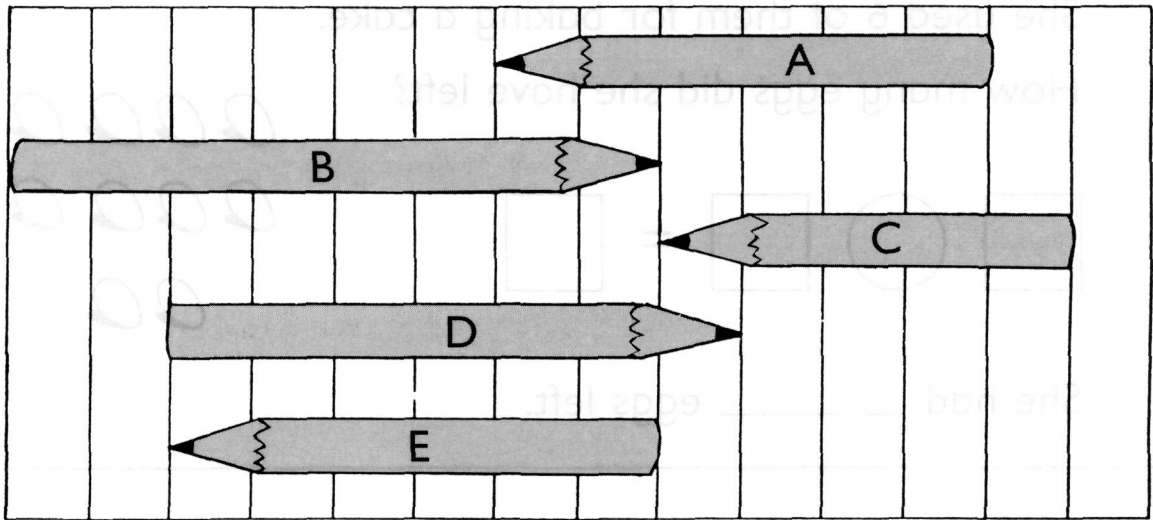
(e)  $12 + 4 =$

(f)  $16 - 3 =$

(g)  $6 + 8 =$

(h)  $17 - 8 =$

7. Fill in the blanks.

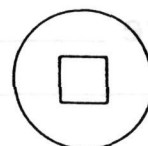
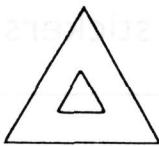
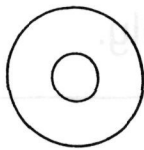
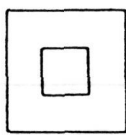


(a) Pencil \_\_\_\_\_ is as long as pencil \_\_\_\_\_.

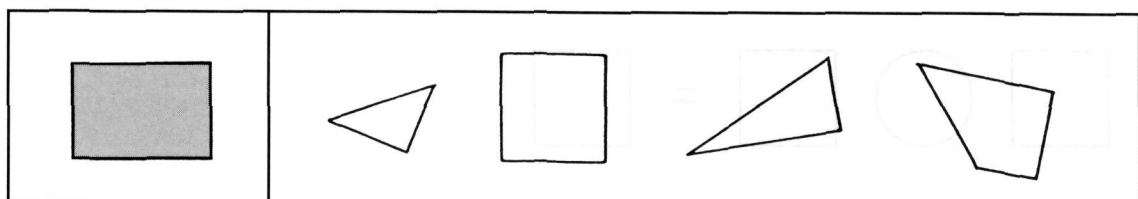
(b) Pencil \_\_\_\_\_ is the shortest.

(c) Pencil \_\_\_\_\_ is the longest.

8. Cross out the one which does not belong.



9. Color the 2 pieces that make up the given shape.

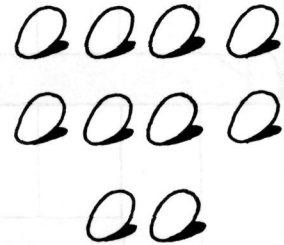


10. Mary had 10 eggs.

She used 6 of them for baking a cake.

How many eggs did she have left?

$$\square \bigcirc \square = \square$$



She had \_\_\_\_\_ eggs left.

---


11. Ashley had 14 stickers.

She gave some of them to Lily.

She had 7 stickers left.

How many stickers did she give to Lily?

$$\square \bigcirc \square = \square$$



She gave \_\_\_\_\_ stickers to Lily.


---

12. Emily needs 16 chairs for a party.

She has 9 chairs now.

How many more chairs does she need?

$$\square \bigcirc \square = \square$$



She needs \_\_\_\_\_ more chairs.