




# EXERCISE 44

1. Match.




8 o'clock

5 o'clock





1 o'clock

3 o'clock




11 o'clock

10 o'clock



7 o'clock

9 o'clock




2. Write the time shown on each clock.

(a)




Matthew has lunch at \_\_\_\_\_.

(b)





He does his homework at \_\_\_\_\_.

(c)




He goes swimming at \_\_\_\_\_.

(d)



He has dinner at \_\_\_\_\_.

(e)



He watches TV at \_\_\_\_\_.


(f)



He goes to bed at \_\_\_\_\_.

# EXERCISE 45


1. Match.




half past 6



half past 2



6 o'clock




half past 7


half past 10



5 o'clock




2. Write the time shown on each clock face.




Family Day  
Welcome to *Sentosa*


Arrival:




\_\_\_\_\_



At the  
Butterfly Park:




\_\_\_\_\_




Fort  
Siloso


At Fort Siloso:



\_\_\_\_\_



At the  
Underwater  
World:



\_\_\_\_\_

3. Write the time shown on each clock.



\_\_\_\_\_




\_\_\_\_\_



\_\_\_\_\_



\_\_\_\_\_



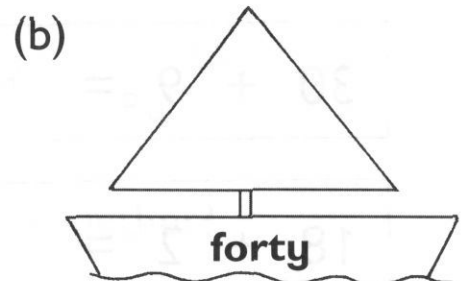
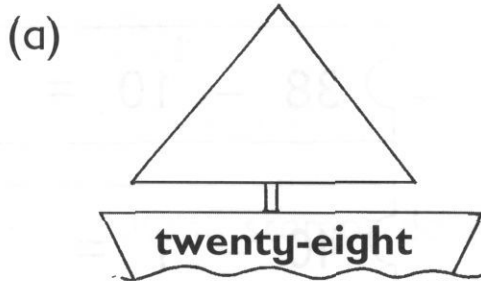
\_\_\_\_\_



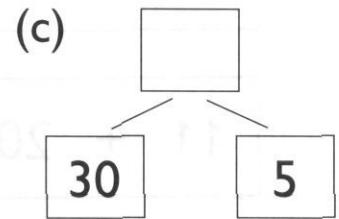
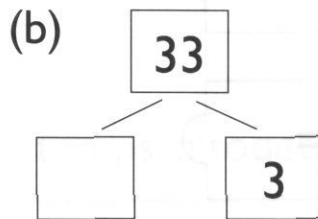
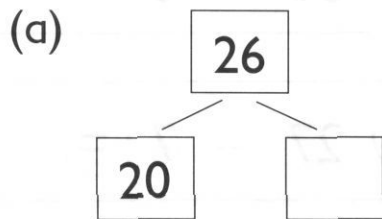
\_\_\_\_\_

## REVIEW 5

1. Write the numbers.



2. Fill in the missing numbers.



3. Fill in the missing numbers.

5, 10, \_\_\_\_\_, 20, \_\_\_\_\_, \_\_\_\_\_, \_\_\_\_\_, 40

4. Fill in the missing numbers.

(a) 5 more than 10 is .

(b) 10 more than 10 is .

(c) 4 less than 24 is .

(d) 10 less than 38 is .



5. Add or subtract.

Then pair up the number sentences.

$30 + 9 =$

$38 - 10 =$

$18 + 2 =$

$40 - 1 =$

$20 + 8 =$

$39 - 8 =$

$11 + 20 =$

$27 - 7 =$

6. Match.



Four o'clock



Half past three



Three o'clock



Half past four



7.

I have 6 stamps.



David

I have 4 stamps.



Tyrone

I have 5 stamps.



Ryan

How many stamps do they have altogether?

$$\square \bigcirc \square \bigcirc \square = \square$$

They have \_\_\_\_\_ stamps altogether.

---

8.

I have 12 books.



Amber

I have 3 more books than Amber.



Lily

How many books does Lily have?

$$\square \bigcirc \square = \square$$

Lily has \_\_\_\_\_ books.

9. Emma bought 14 apples.

She gave 10 apples to her friends.

How many apples did she have left?

She had \_\_\_\_\_ apples left.

---

10. Bonita gave 6 balloons to her friends.

She had 9 balloons left.

How many balloons did she have at first?

She had \_\_\_\_\_ balloons at first.

---

11. Mrs. Gray had 20 eggs.

She used some eggs to bake cakes.

She had 8 eggs left.

How many eggs did she use?

She used \_\_\_\_\_ eggs.