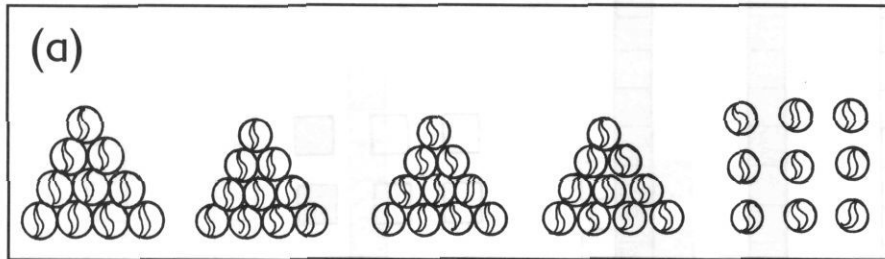



REVIEW 6

1. Count the tens and ones.

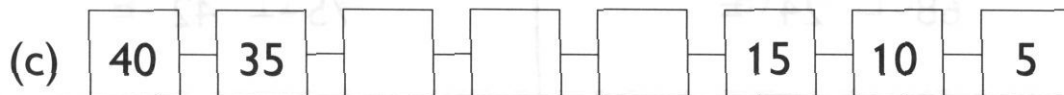
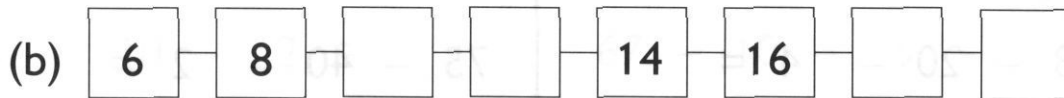
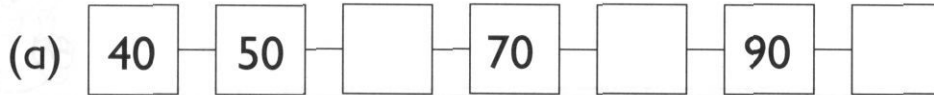


Tens	Ones




Tens	Ones

2. Fill in the missing numbers.




3. Arrange these numbers in order.

Begin with the smallest.

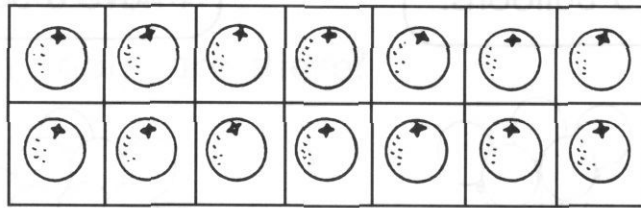


smallest

greatest



4. How many oranges are there altogether?




$$7 \times 2 =$$

There are _____ oranges altogether.

5. Share 8 balloons equally between 2 children.

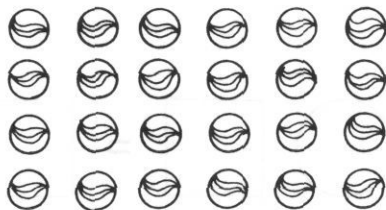
How many balloons does each child get?



Each child gets _____ balloons.


6. Circle groups of 6 marbles.

How many groups are there?



There are _____ groups.

7.




How many fewer balloons does David have than Lynn?

$$\square \ominus \square = \square$$

David has _____ fewer balloons than Lynn.

8.



How many cookies did Cameron eat?

$$\square \ominus \square = \square$$

Cameron ate _____ cookies.

9. There are 20 children in an art class.

6 of them are girls.

How many boys are there?

There are _____ boys.

10. There are 8 big balls and 6 small balls in a basket.

How many balls are there in the basket?

There are _____ balls in the basket.

11. There are 15 marbles.

4 of them are outside the bag.

How many marbles are there in the bag?



There are _____ marbles in the bag.