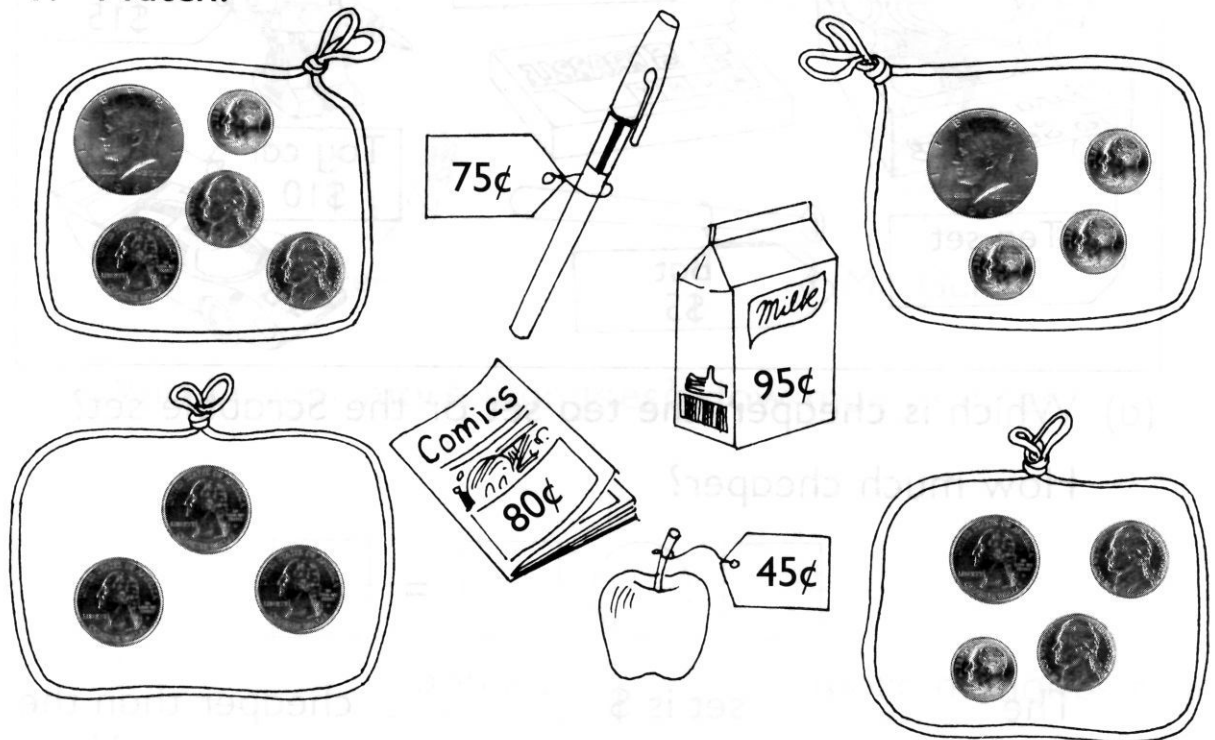
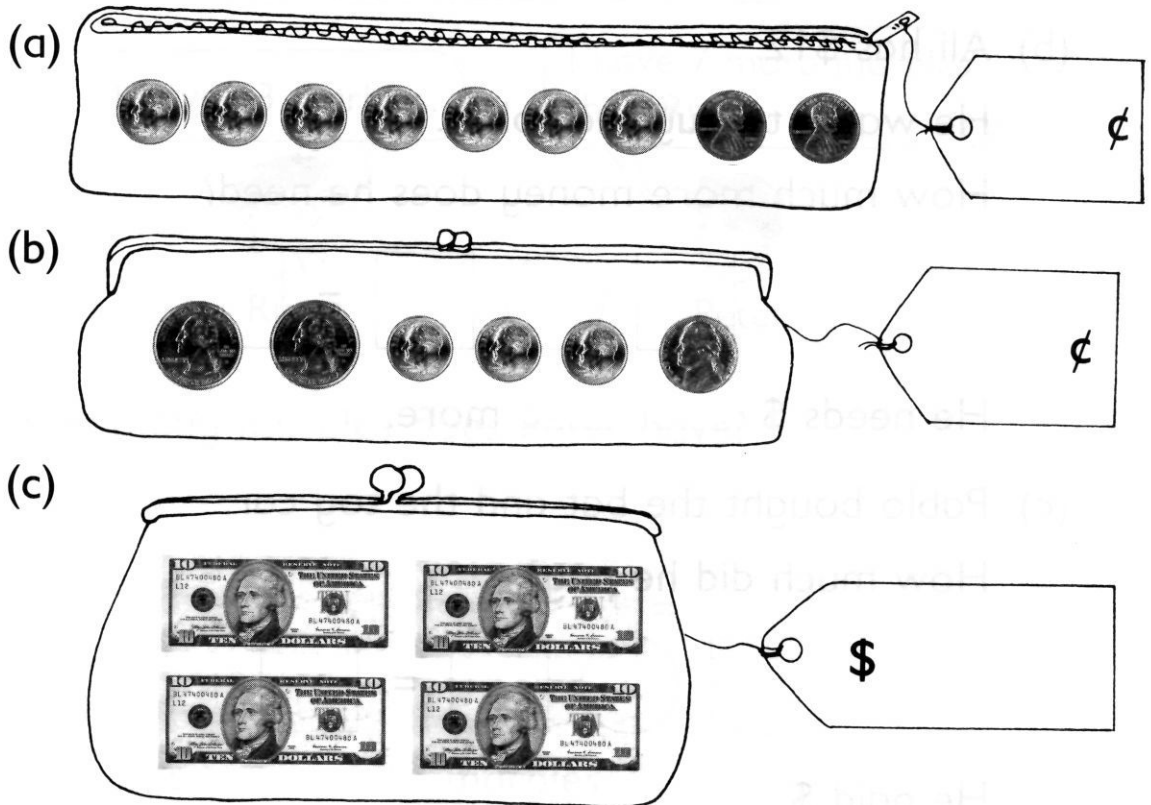


REVIEW 7

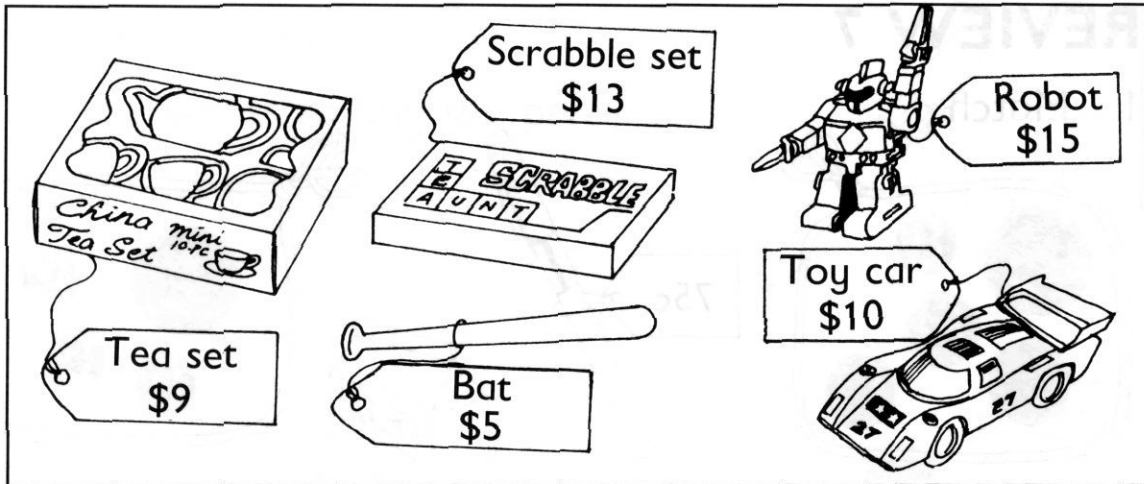
1. Match.



2. How much money is there in each set?



3.



(a) Which is cheaper, the tea set or the Scrabble set?
How much cheaper?

$$\square \bigcirc \square = \square$$

The _____ set is \$ _____ cheaper than the _____ set.

(b) Ali has \$12.

He wants to buy the robot.

How much more money does he need?

$$\square \bigcirc \square = \square$$

He needs \$ _____ more.

(c) Pablo bought the bat and the toy car.

How much did he pay?

$$\square \bigcirc \square = \square$$

He paid \$ _____.

4.

I bought 3 mangoes.



Mr. Lee

I bought 10 mangoes.



Mr. Garcia

Who bought more mangoes? How many more?

$$\square \bigcirc \square = \square$$

Mr. _____ bought _____ more mangoes than
Mr. _____.

5.

I have 13 marbles.



Ryan

I have 7 more marbles
than Ryan.



Peter

How many marbles does Peter have?


$$\square \bigcirc \square = \square$$

Peter has _____ marbles.

6. After giving away 5 shells, John had 6 shells left.
How many shells did he have at first?

He had _____ shells at first.

7. Nicole bought 12 pastries.
She put 4 of them on a plate.
She put the rest in a box.
How many pastries were there in the box?



There were _____ pastries in the box.

8. Mary has 11 story books.
She has 2 more story books than Sally.
How many story books does Sally have?

Sally has _____ story books.