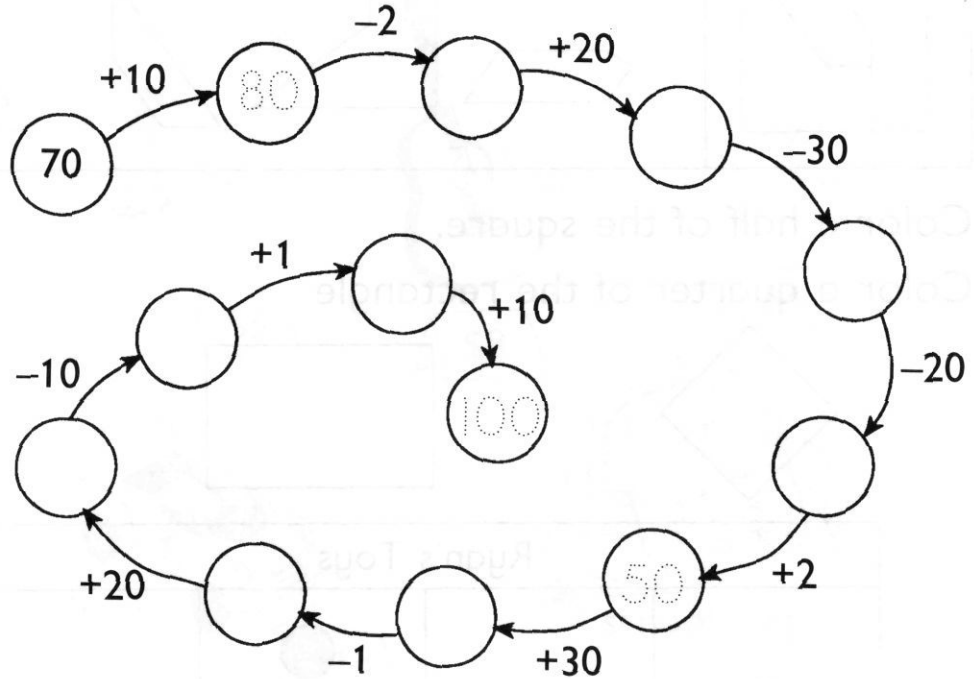


REVIEW 8

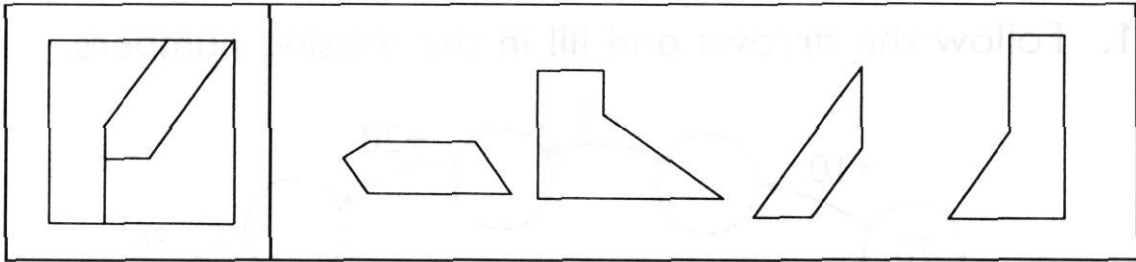
1. Follow the arrows and fill in the missing numbers.




2. Add or subtract.

<p>(a)</p> <p>$59 + 4 =$</p>	<p>(b)</p> <p>$76 + 8 =$</p>
<p>(c)</p> <p>$62 - 5 =$</p>	<p>(d)</p> <p>$83 - 5 =$</p>

3. Color the 3 pieces that form the given square.



4. Color a half of the square.
Color a quarter of the rectangle.




Ryan's Toys			
● ● ● ● ●	● ● ●	● ● ● ● ● ●	● ● ● ●
 Boat	 Car	 Airplane	 Soldier
Each ● stands for 1 toy.			

Fill in the blanks.

- (a) Ryan has _____ airplanes.
- (b) He has _____ more boats than cars.
- (c) He has _____ fewer soldiers than airplanes.
- (d) He has _____ toys altogether.

6.



(a) Devi bought the guitar and the umbrella.

She spent \$ _____ altogether.

(b) Rahmat had \$20.

He bought the toy car.

He had \$ _____ left.

(c) The school bag is \$ _____ cheaper than the toy car.

(d) Meihua spent \$13.

She bought the _____ and the _____.

7. Thomas and Emily have 13 apples altogether.

Thomas has 6 apples.

How many apples does Emily have?

Emily has _____ apples.

8. Sara had \$20.

She had \$6 left after buying a teddy bear.

How much did she pay for the teddy bear?



She paid \$ _____ for the teddy bear.

9. Justin has \$11.

He has \$3 less than Tom.

How much money does Tom have?

Tom has \$ _____ .

10. Amy has 32 stickers.
Lacey gives her 23 more.
How many stickers does Amy have now?

Amy has _____ stickers now.

11. There are 3 dimes and 3 nickels in a purse.
What is the total amount of cents in the purse?

The total amount of cents in the purse is _____.

12. Mary has a dollar bill.
How many quarters can she get for the dollar bill?

Mary can get _____ quarters.

13. Peter has 3 nickels. John has 2 dimes. David has 1 quarter.
Who has the most money?

_____ has the most money.

14. Adam paid 3 quarters and 1 nickel for a candy bar.
How much did the candy bar cost?

The candy bar cost _____ cents.

15. Juan has 54 marbles.
He gives away 6 of them.
How many marbles does he have left?

He has _____ marbles left.