


EXERCISE 15

1. Use the numbers in the bag to fill in the blanks.

(a)




25 is greater than _____.

38 is smaller than _____.

The greatest number is _____.

The smallest number is _____.

(b)



29 is greater than _____.

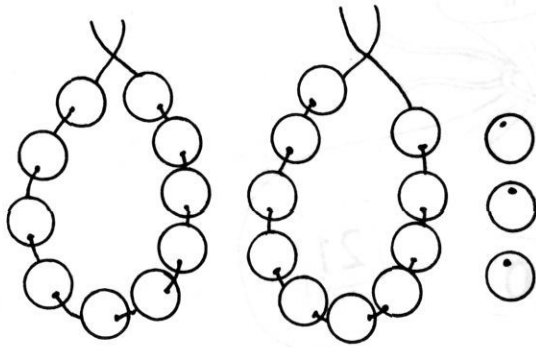
35 is smaller than _____.

The greatest number is _____.

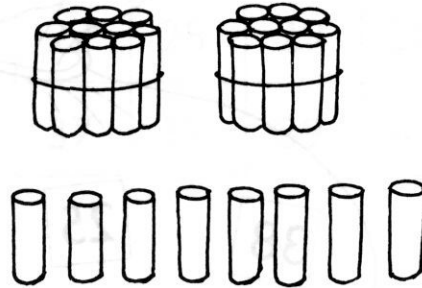
The smallest number is _____.

EXERCISE 16

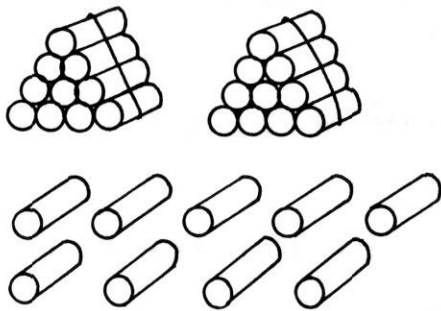
1. Write how many tens and ones.




23 = ___ tens ___ ones



28 = ___ tens ___ ones



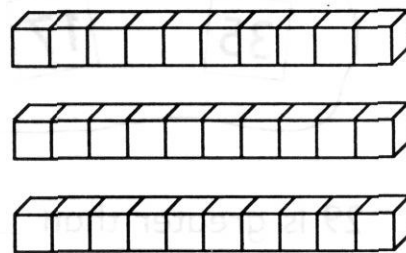
29 = ___ tens ___ ones



26 = ___ tens ___ ones



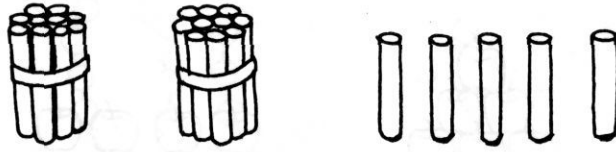
38 = ___ tens ___ ones



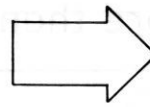
30 = ___ tens ___ ones

2. Write how many tens and ones. Then write the number.

(a)

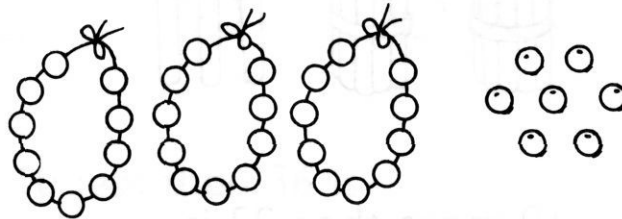


| Tens | Ones |
|------|------|
| 2 | 5 |

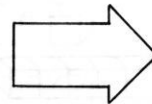


25

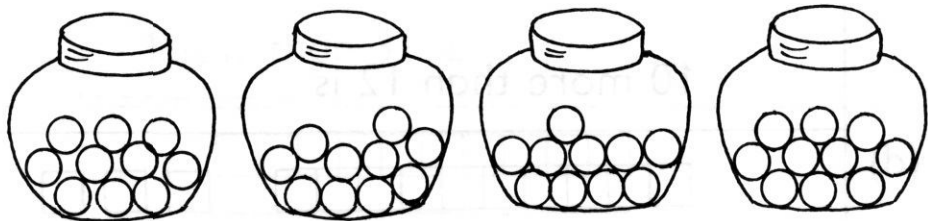
(b)



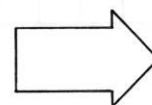
| Tens | Ones |
|------|------|
| | |



(c)




| Tens | Ones |
|------|------|
| | |



EXERCISE 17

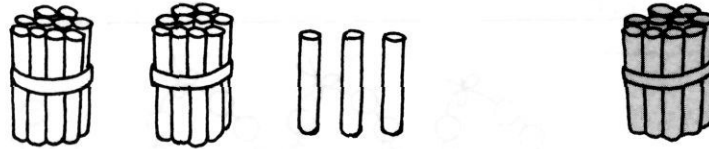
1. Fill in the blanks.

(a)



1 more than 18 is _____.

(b)



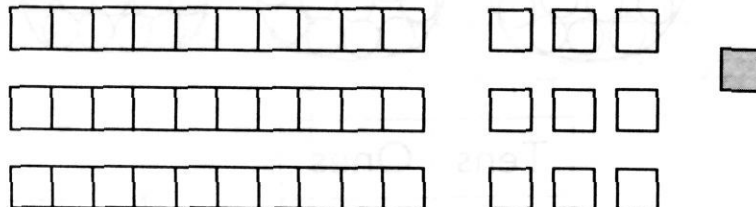
10 more than 23 is _____.

(c)



10 more than 12 is _____.

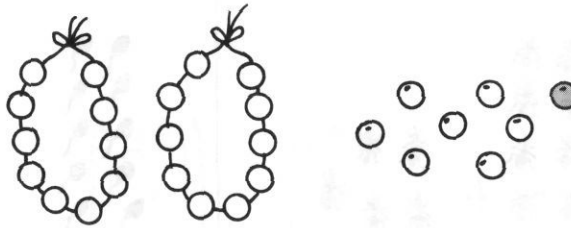
(d)



1 more than 39 is _____.

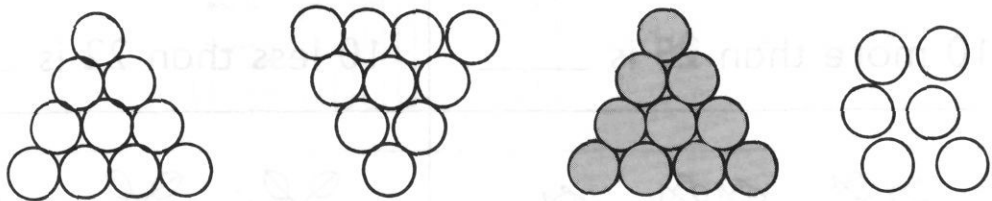
2. Fill in the blanks.

(a)



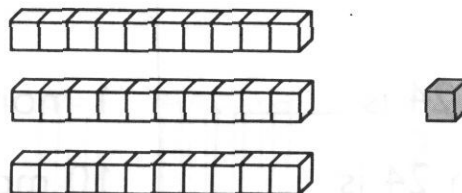
1 less than 28 is _____.

(b)




10 less than 36 is _____.

(c)





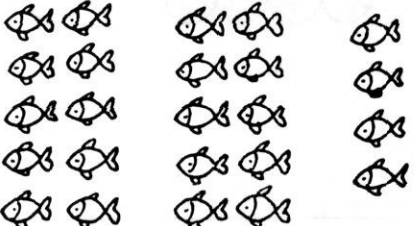



1 less than 31 is _____.

(d)



10 less than 31 is _____.

3. Fill in the blanks.

| | |
|--|---|
|  <p>1 more than 25 is _____.</p> <p>10 more than 25 is _____.</p> |  <p>1 less than 22 is _____.</p> <p>10 less than 22 is _____.</p> |
|  <p>1 more than 24 is _____.</p> <p>10 more than 24 is _____.</p> |  <p>1 more than 27 is _____.</p> <p>10 more than 27 is _____.</p> |
|  <p>1 less than 26 is _____.</p> <p>10 less than 26 is _____.</p> |  <p>1 less than 29 is _____.</p> <p>10 less than 29 is _____.</p> |