

REVISION 5

1. The table shows the prices of three refrigerators.

Refrigerator A	Refrigerator B	Refrigerator C
\$2035	\$1400	\$1835

Fill in the blanks.

- (a) Refrigerator C is _____ cheaper than Refrigerator A.
- (b) Refrigerator _____ is the cheapest.
2. Write the numbers in words.



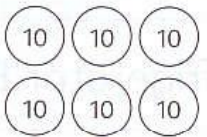

(a) 5007


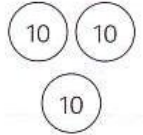
(b) 1043

(c) 9560

3. In 5672, the value of digit 5 is _____.
4. In 3812, the digit 8 stands for _____.
5. In 6840, the digit _____ is in the tens place.
6. In 4297, the digit _____ is in the hundreds place.
Its value is _____.

7. Write the numbers.

Thousands	Hundreds	Tens	Ones
			

Thousands	Hundreds	Tens	Ones
			

8. Find the value of each of the following.

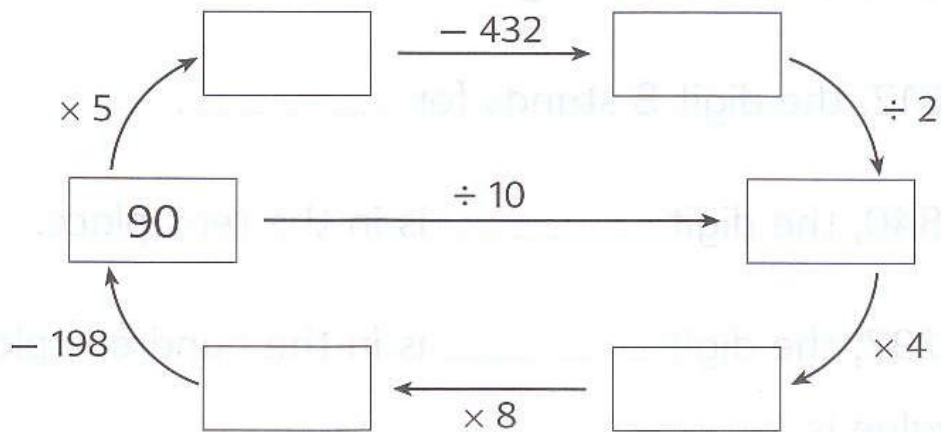
(a) $6053 \xrightarrow{+ 500}$

(b) $3984 \xrightarrow{- 40}$

(c) $8107 \xrightarrow{+ 1000}$

(d) $4790 \xrightarrow{- 200}$

9. Find the answers by following the arrows.



10. 2950 people visited an exhibition on Saturday.
3300 people visited the exhibition on Sunday.
How many more people visited the exhibition on Sunday than on Saturday?

-
11. After selling 905 kg of rice, Mr Ho had 145 kg of rice left.
How many kilograms of rice had he at first?

-
12. There are 7 boxes each containing 50 oranges.
How many oranges are there altogether?

13. A fruit seller had 928 oranges.
16 of them were rotten.
He packed the rest into bags of 8.
How many bags of oranges were there?

-
14. Mrs Huang earns \$2500 a month.
She spends \$500 on food and \$1250 on others.
She saves the rest of the money.
How much does she save a month?

REVISION 6

1. Fill in the blanks.

(a) 1 more than 4069 is _____.

(b) 10 more than 1390 is _____.

(c) _____ is 10 less than 6029.

(d) _____ is 100 less than 5000.

2. Write the missing numbers.

(a) $100 + \text{_____} = 1000$

(b) $402 + \text{_____} = 1000$

(c) $4329 + \text{_____} = 5000$

3. Do these.

(a) $1988 + 650 =$

(b) $4010 - 1256 =$

(c) $684 \times 9 =$

(d) $440 \div 9 =$

4. (a) The difference between two numbers is 50.
If the smaller number is 24, what is the other number?

- (b) The product of two numbers is 72.
If one number is 9, what is the other number?

-
5. 6 children bought a present for \$42.
They shared the cost equally.
How much did each child pay?

-
6. Minghua's weight is 52 kg now.
He was 8 kg lighter last year.
What was his weight last year?

7. After selling 1325 sticks of satay, Mr Li still had 576 sticks of satay left.
How many sticks of satay had he at first?

-
8. A basket of rambutans weighs 150 kg.
It is 112 kg lighter than a basket of durians.
Find the weight of the basket of durians.



-
9. A fruit seller packed 108 apples into bags of 5.
How many bags were there?
How many apples were left over?

10. The total weight of a textbook and 8 notebooks is 800 g. The weight of the textbook is 200 g. If the notebooks are of the same weight, find the weight of each notebook.

-
11. After buying 9 kg of crabs, Mrs Lin had \$110 left. How much money did she have at first?

