

1987 AJHSME Problems

Problem 1

$$.4 + .02 + .006 =$$

- (A) .012 (B) .066 (C) .12 (D) .24 (E) .426

Solution

Problem 2

$$\frac{2}{25} =$$

- (A) .008 (B) .08 (C) .8 (D) 1.25 (E) 12.5

Solution

Problem 3

$$2(81 + 83 + 85 + 87 + 89 + 91 + 93 + 95 + 97 + 99) =$$

- (A) 1600 (B) 1650 (C) 1700 (D) 1750 (E) 1800

Solution

Problem 4

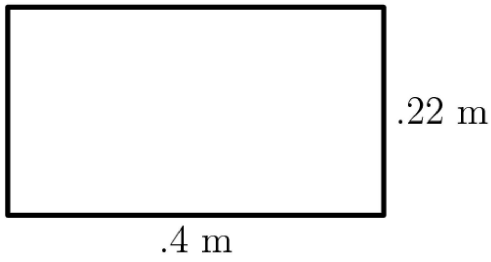
Martians measure angles in clerts. There are 500 clerts in a full circle. How many clerts are there in a right angle?

- (A) 90 (B) 100 (C) 125 (D) 180 (E) 250

Solution

Problem 5

The area of the rectangular region is



- (A) $.088\text{ m}^2$ (B) $.62\text{ m}^2$ (C) $.88\text{ m}^2$ (D) 1.24 m^2 (E) 4.22 m^2

Solution

Problem 6

The smallest product one could obtain by multiplying two numbers in the set $\{-7, -5, -1, 1, 3\}$ is


- (A) -35 (B) -21 (C) -15 (D) -1 (E) 3

Solution

Problem 7

The large cube shown is made up of 27 identical sized smaller cubes. For each face of the large cube, the opposite face is shaded the same way. The total number of smaller cubes that must have at least one face shaded is

- (A) 10 (B) 16 (C) 20 (D) 22 (E) 24



Solution

Problem 8

If A and B are nonzero digits, then the number of digits (not necessarily different) in the sum of the three whole numbers is

$$\begin{array}{r} 9 \quad 8 \quad 7 \quad 6 \\ \quad A \quad 3 \quad 2 \\ \quad \quad B \quad 1 \\ \hline \end{array}$$

- (A) 4 (B) 5 (C) 6 (D) 9 (E) depends on the values of A and B

Solution

Problem 9

When finding the sum $\frac{1}{2} + \frac{1}{3} + \frac{1}{4} + \frac{1}{5} + \frac{1}{6} + \frac{1}{7}$, the least common denominator used is

- (A) 120 (B) 210 (C) 420 (D) 840 (E) 5040

Solution

Problem 10

$$4(299) + 3(299) + 2(299) + 298 =$$

- (A) 2889 (B) 2989 (C) 2991 (D) 2999 (E) 3009

Solution

Problem 11

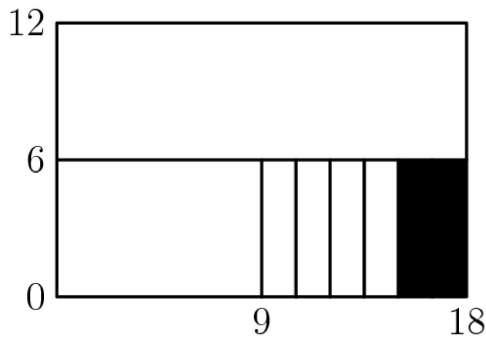
The sum $2\frac{1}{7} + 3\frac{1}{2} + 5\frac{1}{19}$ is between

- (A) 10 and $10\frac{1}{2}$ (B) $10\frac{1}{2}$ and 11 (C) 11 and $11\frac{1}{2}$ (D) $11\frac{1}{2}$ and 12 (E) 12 and $12\frac{1}{2}$

Solution

Problem 12

What fraction of the large 12 by 18 rectangular region is shaded?



- (A) $\frac{1}{108}$ (B) $\frac{1}{18}$ (C) $\frac{1}{12}$ (D) $\frac{2}{9}$ (E) $\frac{1}{3}$

Solution

Problem 13

Which of the following fractions has the largest value?

- (A) $\frac{3}{7}$ (B) $\frac{4}{9}$ (C) $\frac{17}{35}$ (D) $\frac{100}{201}$ (E) $\frac{151}{301}$

Solution

Problem 14

A computer can do $10,000$ additions per second. How many additions can it do in one hour?

- (A) 6 million (B) 36 million (C) 60 million (D) 216 million (E) 360 million

Solution

Problem 15

The sale ad read: "Buy three tires at the regular price and get the fourth tire for three dollars;" Sam paid 240 dollars for a set of four tires at the sale. What was the regular price of one tire?

- (A) 59.25 dollars (B) 60 dollars (C) 70 dollars (D) 79 dollars (E) 80 dollars

Solution

Problem 16

Joyce made 12 of her first 30 shots in the first three games of this basketball game, so her seasonal shooting average was 40%. In her next game, she took 10 shots and raised her seasonal shooting average to 50%. How many of these 10 shots did she make?

- (A) 2 (B) 3 (C) 5 (D) 6 (E) 8

Solution

Problem 17

Abby, Bret, Carl, and Dana are seated in a row of four seats numbered #1 to #4. Joe looks at them and says:

"Bret is next to Carl."

"Abby is between Bret and Carl."

However each one of Joe's statements is false. Bret is actually sitting in seat #3. Who is sitting in seat #2?

- (A) Abby (B) Bret (C) Carl (D) Dana (E) There is not enough information to be sure.

Solution

Problem 18

Half the people in a room left. One third of those remaining started to dance. There were then 12 people who were not dancing. The original number of people in the room was what?

- (A) 24 (B) 30 (C) 36 (D) 42 (E) 72

Solution

Problem 19

A calculator has a squaring key x^2 which replaces the current number displayed with its square. For example, if the display is 000003 and the x^2 key is depressed, then the display becomes 000009. If the display reads 000002, how many times must you depress the x^2 key to produce a displayed number greater than 500?

- (A) 4 (B) 5 (C) 8 (D) 9 (E) 250

Solution

Problem 20

"If a whole number n is not prime, then the whole number $n - 2$ is not prime." A value of n which shows this statement to be false is

- (A) 9 (B) 12 (C) 13 (D) 16 (E) 23

Solution

Problem 21

Suppose n^* means $\frac{1}{n}$, the reciprocal of n . For example, $5^* = \frac{1}{5}$. How many of the following statements are true?

i) $3^* + 6^* = 9^*$

ii) $6^* - 4^* = 2^*$

iii) $2^* \cdot 6^* = 12^*$

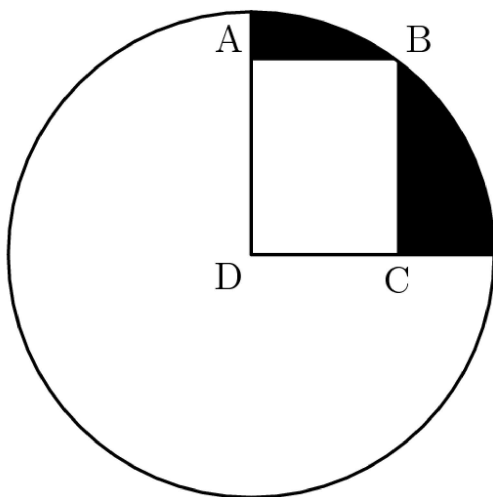
iv) $10^* \div 2^* = 5^*$

- (A) 0 (B) 1 (C) 2 (D) 3 (E) 4

Solution

Problem 22

ABCD is a rectangle, D is the center of the circle, and B is on the circle. If $AD = 4$ and $CD = 3$, then the area of the shaded region is between



- (A) 4 and 5 (B) 5 and 6 (C) 6 and 7 (D) 7 and 8 (E) 8 and 9

Solution

Problem 23

Assume the adjoining chart shows the 1980 U.S. population, in millions, for each region by ethnic group. To the nearest percent, what percent of the U.S. Black population lived in the South?

	NE	MW	South	West
White	42	52	57	35
Black	5	5	15	2
Asian	1	1	1	3
Other	1	1	2	4

- (A) 20% (B) 25% (C) 40% (D) 56% (E) 80%

Solution

Problem 24

A multiple choice examination consists of 20 questions. The scoring is +5 for each correct answer, -2 for each incorrect answer, and 0 for each unanswered question. John's score on the examination is 48. What is the maximum number of questions he could have answered correctly?

- (A) 9 (B) 10 (C) 11 (D) 12 (E) 16

Solution

Problem 25

Ten balls numbered 1 to 10 are in a jar. Jack reaches into the jar and randomly removes one of the balls. Then Jill reaches into the jar and randomly removes a different ball. The probability that the sum of the two numbers on the balls removed is even is

- (A) $\frac{4}{9}$ (B) $\frac{9}{19}$ (C) $\frac{1}{2}$ (D) $\frac{10}{19}$ (E) $\frac{5}{9}$

Solution

1987 AJHSME Answer Key

1. E
2. B
3. E
4. C
5. A
6. B
7. C
8. B
9. C
10. B
11. B
12. C
13. E
14. B
15. D
16. E
17. D
18. C
19. A
20. A
21. C
22. D
23. D
24. D
25. A